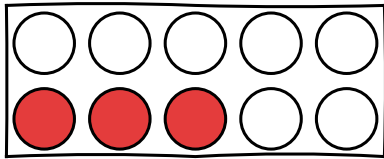
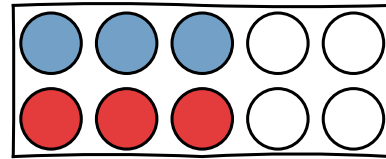


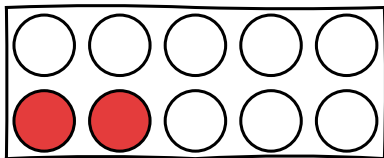
Zahlenraum 10 | Verdoppeln



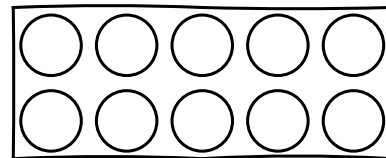
3



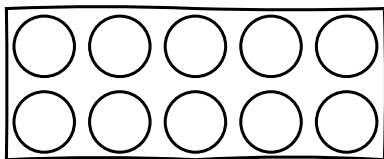
Das Doppelte
von 3 ist ____ .



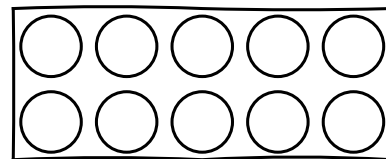
2



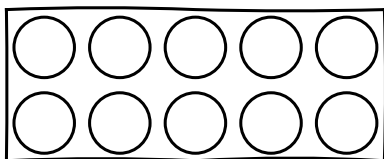
Das Doppelte
von 2 ist ____ .



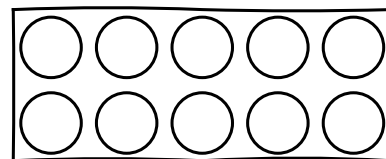
5



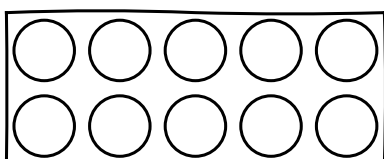
Das Doppelte
von 5 ist ____ .



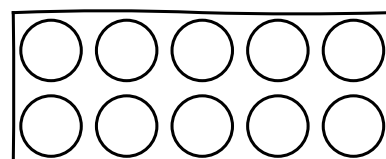
1



Das Doppelte
von 1 ist ____ .



4



Das Doppelte
von 4 ist ____ .