

Schnecken- und Hasenaufgaben





$$5 + 5 + 5 + 5 + 5 + 5 =$$

.....



$$6 \cdot 5 =$$


.....



.....



.....



.....



.....



.....




.....



.....



.....



.....



.....