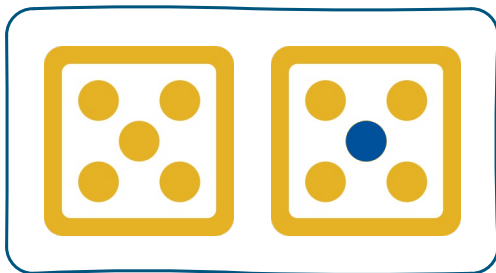


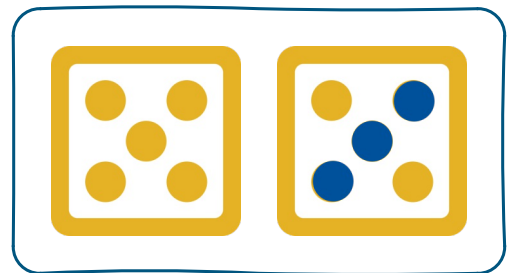
Mengen erfassen | Blatt 1



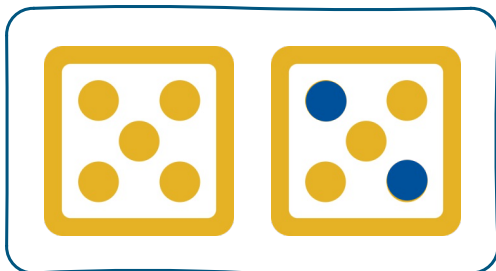
Wie viele Punkte sind gelb, wie viele sind blau?
Versuche, es auf einen Blick zu erkennen – du
brauchst nicht zu zählen!



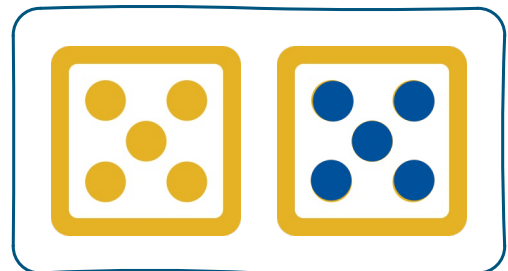
Gelb: ____ Blau ____



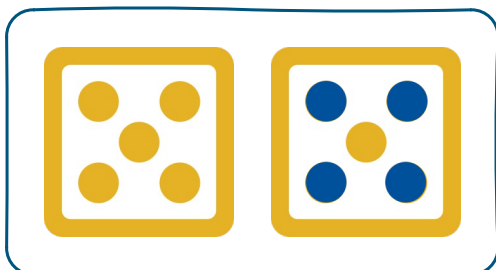
Gelb: ____ Blau ____



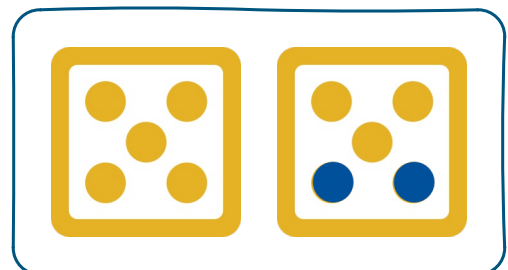
Gelb: ____ Blau ____



Gelb: ____ Blau ____



Gelb: ____ Blau ____

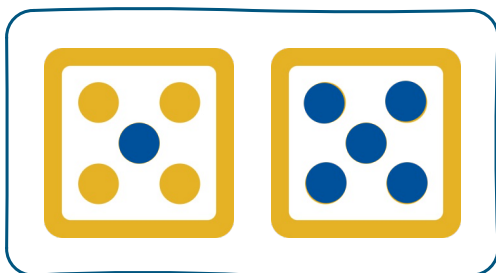


Gelb: ____ Blau ____

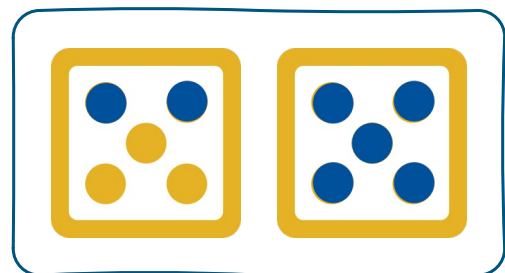
Mengen erfassen | Blatt 2



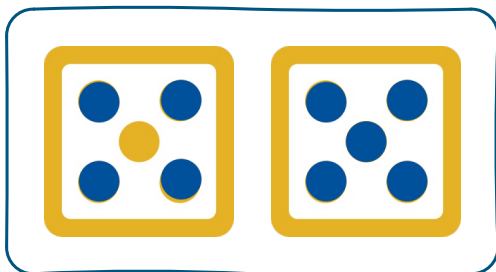
Wie viele Punkte sind gelb, wie viele sind blau?
Versuche, es auf einen Blick zu erkennen – du
brauchst nicht zu zählen!



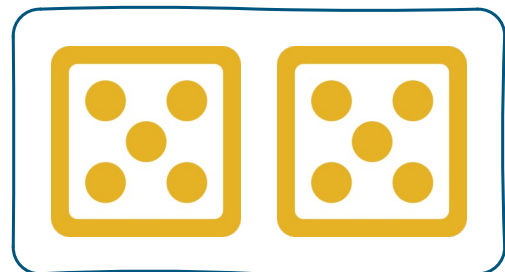
Gelb: ____ Blau ____



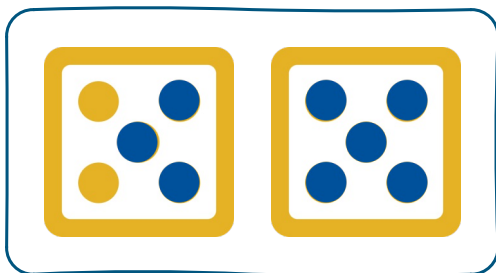
Gelb: ____ Blau ____



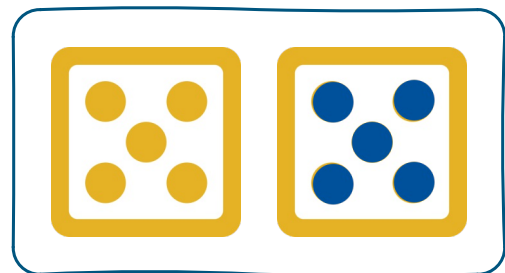
Gelb: ____ Blau ____



Gelb: ____ Blau ____



Gelb: ____ Blau ____



Gelb: ____ Blau ____